

Name: _____

Date: _____

Math: _____

Decimal Unit Lessons ~~1-2~~ Review – HOMEWORK

1. Write each decimal using words.

a. $9.84 =$ _____

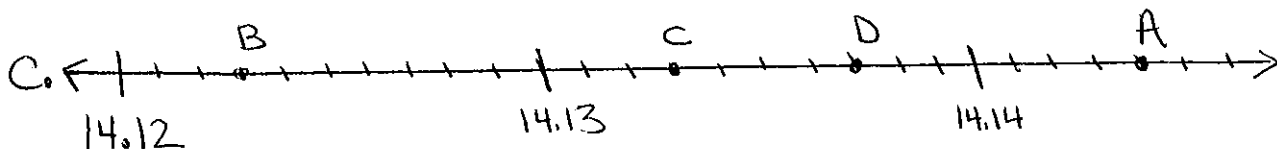

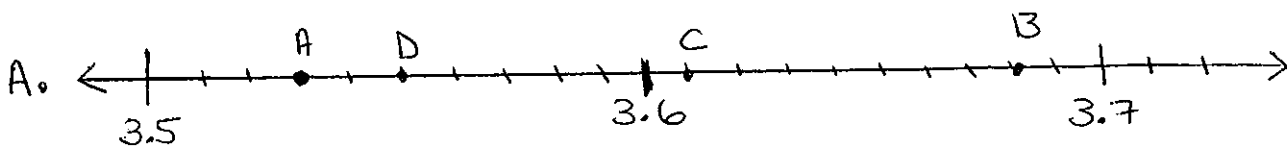
b. $97.207 =$ _____

c. $81.260 =$ _____

d. $-19.1 =$ _____

e. $0.0009 =$ _____

2. Identify each point on the number line(s).



3. Compare each pair using $<$, $>$, \geq , \leq , or $=$

a. -9.7 -5.1

b. 0.3 0.12

c. 0.31 3.10

4. Place on a number line, then order from least to greatest: 0.8 , -0.08 , -0.8 , 0.08

5. Order from least to greatest: 0.0243 , 0.0234 , 0.0123 , 0.0244

6. Round each decimal to the given place value. (Try this)

a. 0.9828 to the nearest hundredth

b. 16.712 to the nearest tens

c. 0.09245 to the nearest thousandth

d. 189.01238 to the nearest tenth

e. 0.7821 to the nearest ones